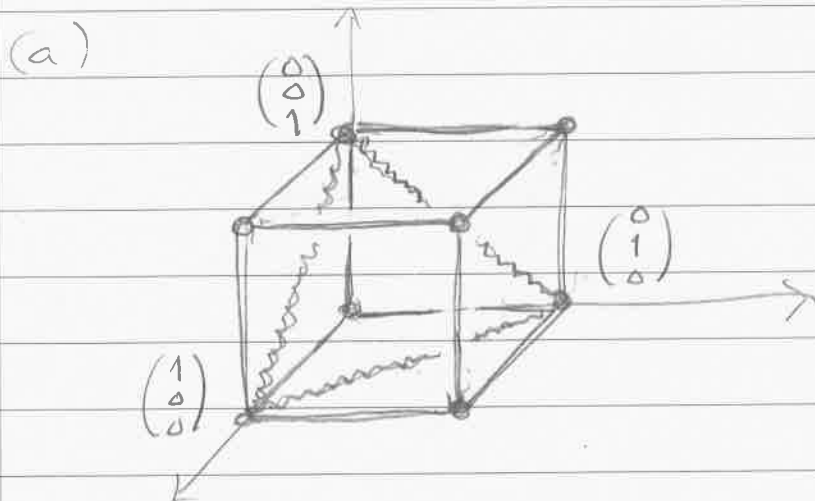
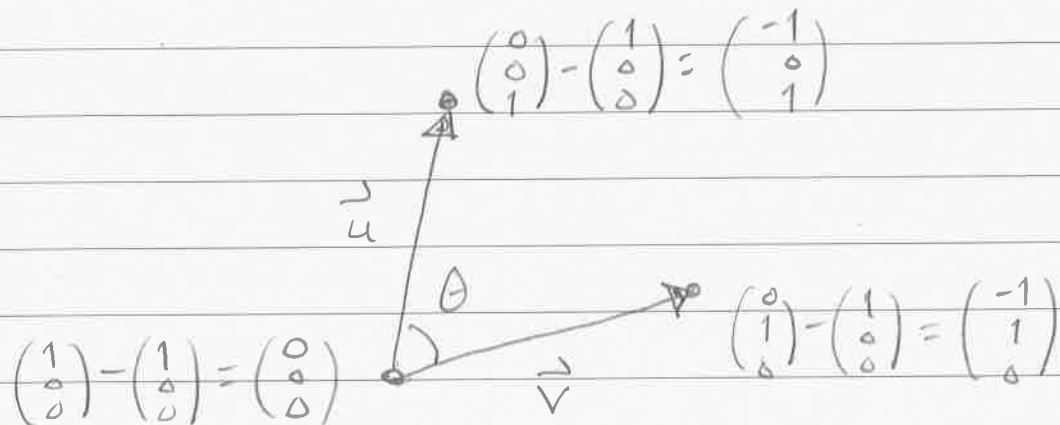


MTH 210, Spring 2016
 HW1 Solutions.

Problem 1:



(b) The triangle is shown above with the squiggly lines. To compute the angle between two edges we should move the corresponding vectors to the origin. Here's one case:



To compute the angle we use the dot product.

$$\cos \theta = \vec{u} \cdot \vec{v} / (\|\vec{u}\| \cdot \|\vec{v}\|)$$

$$= \begin{pmatrix} -1 \\ 0 \\ 1 \end{pmatrix} \cdot \begin{pmatrix} -1 \\ 1 \\ 0 \end{pmatrix} / \left(\left\| \begin{pmatrix} -1 \\ 0 \\ 1 \end{pmatrix} \right\| \cdot \left\| \begin{pmatrix} -1 \\ 1 \\ 0 \end{pmatrix} \right\| \right)$$

$$= ((-1)^2 + 0 + 0) / \left(\sqrt{(-1)^2 + 0^2 + 1^2} \cdot \sqrt{(-1)^2 + 1^2 + 0^2} \right)$$

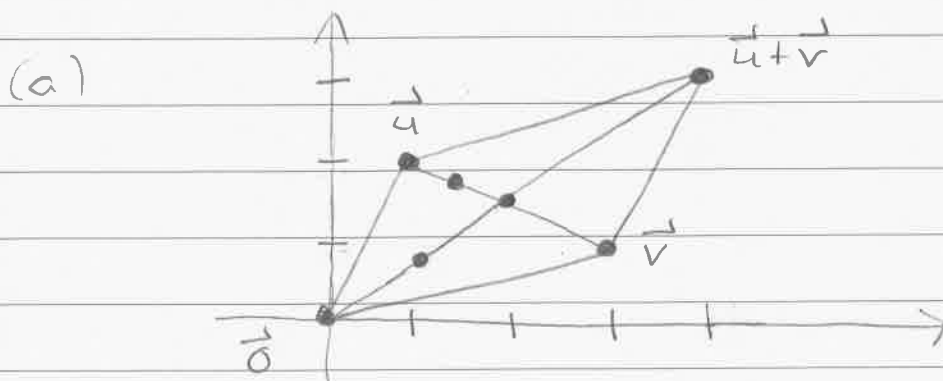
$$= 1 / (\sqrt{2} \cdot \sqrt{2}) = 1/2.$$

We conclude that

$$\theta = \arccos(1/2) = \pi/3 \text{ (or } 60^\circ \text{)}.$$

It turns out that all three angles are the same [the triangle is equilateral].

Problem 2:

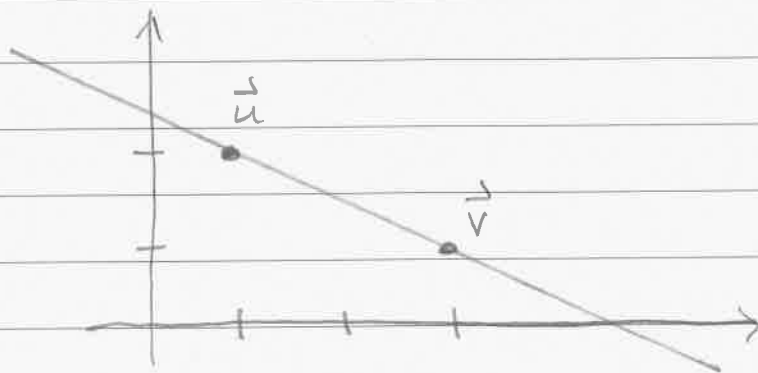


Note that

- $\frac{1}{2}\vec{u} + \frac{1}{2}\vec{v}$ is the midpoint of \vec{u} & \vec{v} .
- $\frac{3}{4}\vec{u} + \frac{1}{4}\vec{v}$ is the midpoint of \vec{u} & $\frac{1}{2}\vec{u} + \frac{1}{2}\vec{v}$.
- $\frac{1}{4}\vec{u} + \frac{3}{4}\vec{v}$ is the midpoint of \vec{v} & $\frac{1}{2}\vec{u} + \frac{1}{2}\vec{v}$.

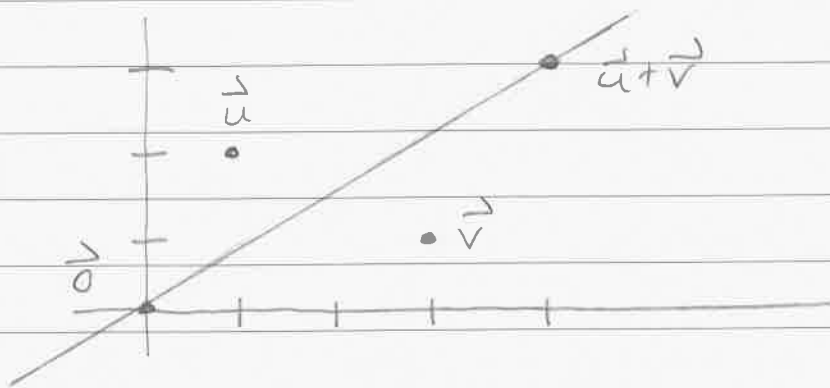
[In general, the midpoint of points \vec{a} & \vec{b} is $\frac{1}{2}(\vec{a} + \vec{b}) = \frac{1}{2}\vec{a} + \frac{1}{2}\vec{b}$.]

(b) The line $a\vec{u} + b\vec{v}$ where $a+b=1$ contains the point \vec{u} (when $a=1$ & $b=0$) and the point \vec{v} (when $a=0$ & $b=1$). Hence it looks like this:



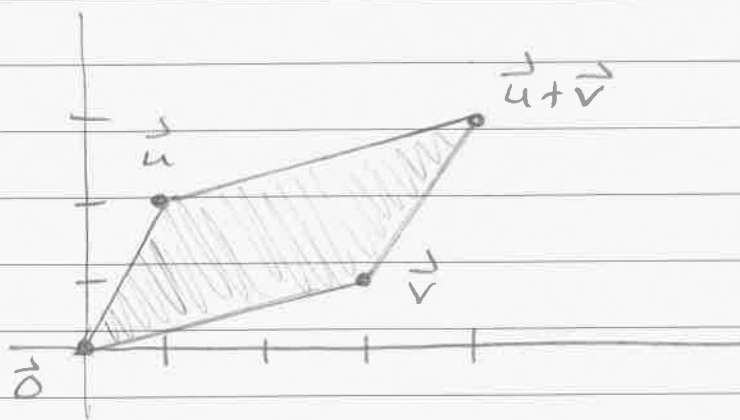
[You might try computing the equation of this line.]

(c) The line $a\vec{u} + a\vec{v}$ contains the point $\vec{0}$ (when $a=0$) and the point $\vec{u} + \vec{v}$ (when $a=1$). Hence it looks like this:

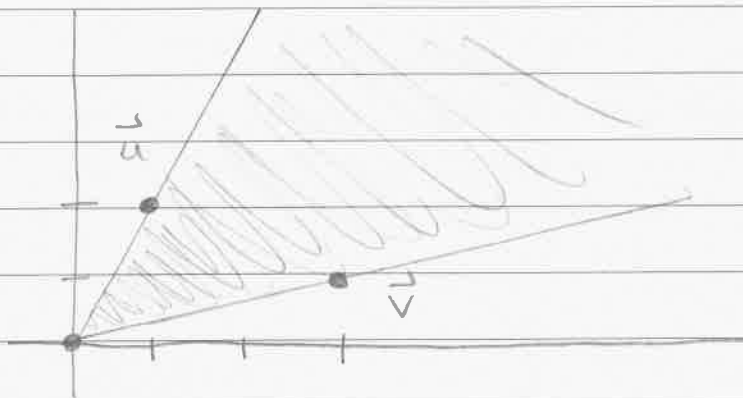


[The equation of this line is ...]

(d) The region $a\vec{u} + b\vec{v}$ when $0 \leq a \leq 1$ and $0 \leq b \leq 1$ is the filled parallelogram with vertices $\vec{0}$, \vec{u} , \vec{v} , $\vec{u} + \vec{v}$:



(d) The region $a\vec{u} + b\vec{v}$ with $0 \leq a$ & $0 \leq b$.
 We could call this region a "two-dimensional cone". It looks like this:



Problem 3: Let $\vec{u} = \begin{pmatrix} u_1 \\ \vdots \\ u_n \end{pmatrix}$, $\vec{v} = \begin{pmatrix} v_1 \\ \vdots \\ v_n \end{pmatrix}$ & $\vec{w} = \begin{pmatrix} w_1 \\ \vdots \\ w_n \end{pmatrix}$.

Then for all numbers a we have

$$\vec{u} \cdot (\vec{v} + a\vec{w}) = \begin{pmatrix} u_1 \\ \vdots \\ u_n \end{pmatrix} \cdot \begin{pmatrix} v_1 + aw_1 \\ \vdots \\ v_n + aw_n \end{pmatrix}$$

$$= u_1(v_1 + aw_1) + \dots + u_n(v_n + aw_n)$$

$$= (u_1v_1 + au_1w_1) + \dots + (u_nv_n + au_nv_n)$$

$$= (u_1v_1 + \dots + u_nv_n) + a(u_1w_1 + \dots + u_nw_n)$$

$$= \vec{u} \cdot \vec{v} + a\vec{u} \cdot \vec{w}.$$



Problem 4: Let \vec{u} & \vec{v} be two vectors in n -dimensional space such that

$$\|\vec{u}\| = \|\vec{v}\| = 1.$$

(a) Then we have

$$\vec{u} \cdot (-\vec{u}) = -(\vec{u} \cdot \vec{u}) = -\|\vec{u}\|^2 = -1^2 = -1.$$

$$\begin{aligned}(\vec{u} + \vec{v}) \cdot (\vec{u} - \vec{v}) &= (\vec{u} + \vec{v}) \cdot \vec{u} - (\vec{u} + \vec{v}) \cdot \vec{v} \\&= \vec{u} \cdot \vec{u} + \vec{v} \cdot \vec{u} - \vec{u} \cdot \vec{v} - \vec{v} \cdot \vec{v} \\&= \vec{u} \cdot \vec{u} - \vec{v} \cdot \vec{v} \\&= \|\vec{u}\|^2 - \|\vec{v}\|^2 \\&= 1^2 - 1^2 = 0.\end{aligned}$$

$$\begin{aligned}(\vec{u} - 2\vec{v}) \cdot (\vec{u} + 2\vec{v}) &= (\vec{u} - 2\vec{v}) \cdot \vec{u} + 2(\vec{u} - 2\vec{v}) \cdot \vec{v} \\&= \vec{u} \cdot \vec{u} - 2\vec{v} \cdot \vec{u} + 2\vec{u} \cdot \vec{v} - 4\vec{v} \cdot \vec{v} \\&= \vec{u} \cdot \vec{u} - 4\vec{v} \cdot \vec{v} \\&= \|\vec{u}\|^2 - 4\|\vec{v}\|^2 \\&= 1^2 - 4 \cdot 1^2 = -3.\end{aligned}$$

(b) Now let's also assume that $\vec{u} \cdot \vec{v} = 0$ and consider the vectors

$$\vec{a} := \vec{u} + 2\vec{v} \quad \& \quad \vec{b} := 3\vec{u} + \vec{v}.$$

Let θ be the angle between \vec{a} & \vec{b} so that

$$\vec{a} \cdot \vec{b} = \|\vec{a}\| \cdot \|\vec{b}\| \cos \theta.$$

To compute θ we first need to know $\vec{a} \cdot \vec{b}$, $\|\vec{a}\|$, and $\|\vec{b}\|$.

$$\begin{aligned}\vec{a} \cdot \vec{b} &= (\vec{u} + 2\vec{v}) \cdot (3\vec{u} + \vec{v}) \\ &= 3\vec{u} \cdot \vec{u} + \vec{u} \cdot \vec{v} + 6\vec{v} \cdot \vec{u} + 2\vec{v} \cdot \vec{v} \\ &= 3\vec{u} \cdot \vec{u} + 7\vec{u} \cdot \vec{v} + 2\vec{v} \cdot \vec{v} \\ &= 3(1) + 7(0) + 2(1) = 5\end{aligned}$$

$$\begin{aligned}\|\vec{a}\|^2 &= \vec{a} \cdot \vec{a} \\ &= (\vec{u} + 2\vec{v}) \cdot (\vec{u} + 2\vec{v}) \\ &= \vec{u} \cdot \vec{u} + 2\vec{u} \cdot \vec{v} + 2\vec{v} \cdot \vec{u} + 4\vec{v} \cdot \vec{v} \\ &= \vec{u} \cdot \vec{u} + 4\vec{u} \cdot \vec{v} + 4\vec{v} \cdot \vec{v} \\ &= (1) + 4(0) + 4(1) = 5\end{aligned}$$

$$\begin{aligned}\|\vec{b}\|^2 &= \vec{b} \cdot \vec{b} \\ &= (3\vec{u} + \vec{v}) \cdot (3\vec{u} + \vec{v}) \\ &= 9\vec{u} \cdot \vec{u} + 3\vec{u} \cdot \vec{v} + 3\vec{v} \cdot \vec{u} + \vec{v} \cdot \vec{v} \\ &= 9\vec{u} \cdot \vec{u} + 6\vec{u} \cdot \vec{v} + \vec{v} \cdot \vec{v} \\ &= 9(1) + 6(0) + (1) = 10.\end{aligned}$$



We conclude that

$$\vec{a} \cdot \vec{b} = \|\vec{a}\| \cdot \|\vec{b}\| \cos \theta$$


$$5 = \sqrt{5} \cdot \sqrt{10} \cos \theta$$

$$5 = 5\sqrt{2} \cos \theta$$

$$\cos \theta = 1/\sqrt{2}$$

$$\theta = 45^\circ \text{ (or } 315^\circ \text{).}$$

[Remark: We get the same result by computing the angle between the vectors $\begin{pmatrix} 1 \\ 2 \end{pmatrix}$ and $\begin{pmatrix} 3 \\ 1 \end{pmatrix}$ in 2D.



I wonder why that might be . . .]