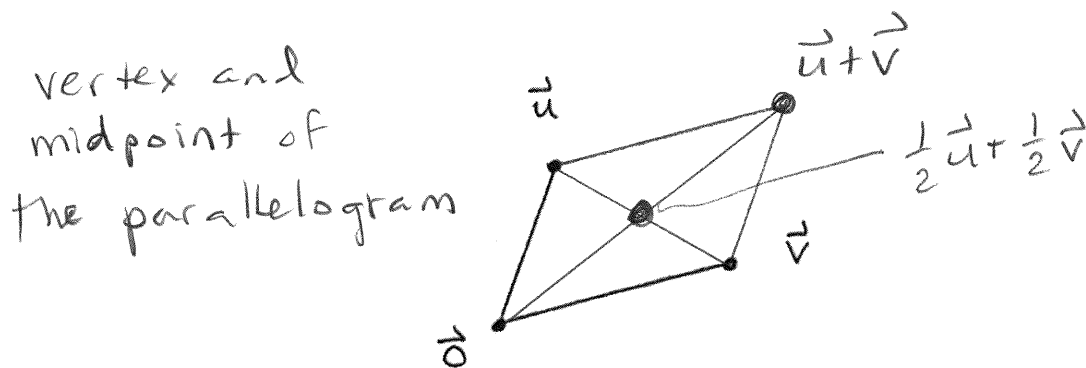
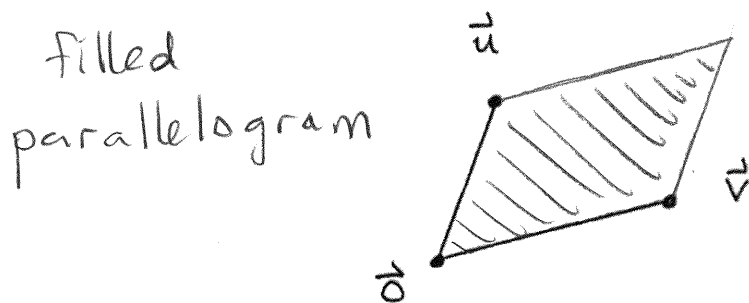


Problem 1. Consider two points \vec{u} and \vec{v} in the Cartesian plane.

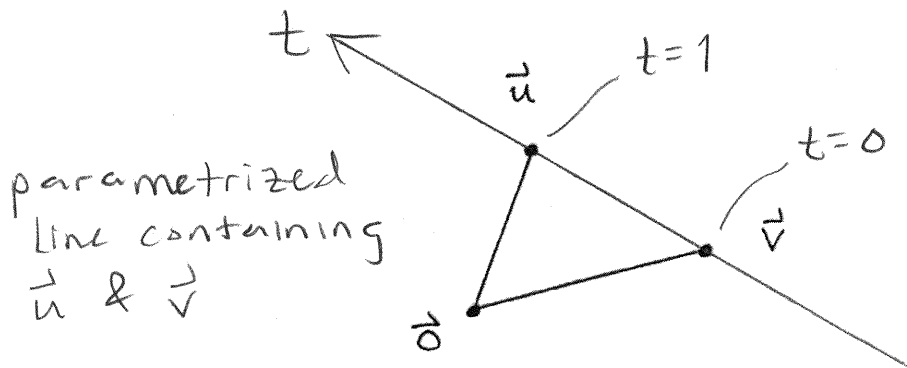
(a) Draw the points $\vec{u} + \vec{v}$ and $\frac{1}{2}\vec{u} + \frac{1}{2}\vec{v}$:



(b) Draw the set of all points $a\vec{u} + b\vec{v}$ where $0 \leq a \leq 1$ and $0 \leq b \leq 1$:



(c) Draw the set of all points $t\vec{u} + (1-t)\vec{v}$ where t ranges over all numbers:



Problem 2. Consider two vectors \vec{v} and \vec{w} with the following properties:

$$\vec{v} \cdot \vec{v} = \|\vec{v}\|^2 = 1, \quad \vec{w} \cdot \vec{w} = \|\vec{w}\|^2 = 2 \quad \text{and} \quad \vec{v} \cdot \vec{w} = 0.$$

(a) Compute the **length** of the vector $\vec{v} + \vec{w}$.

$$\begin{aligned} \|\vec{v} + \vec{w}\|^2 &= (\vec{v} + \vec{w}) \cdot (\vec{v} + \vec{w}) \\ &= \vec{v} \cdot \vec{v} + 2\vec{v} \cdot \vec{w} + \vec{w} \cdot \vec{w} \\ &= 1 + 2(0) + 2 = 3 \end{aligned}$$

$$\Rightarrow \|\vec{v} + \vec{w}\| = \sqrt{3}$$

(b) Compute the **length** of the vector $\vec{v} - 2\vec{w}$.

$$\begin{aligned} \|\vec{v} - 2\vec{w}\|^2 &= (\vec{v} - 2\vec{w}) \cdot (\vec{v} - 2\vec{w}) \\ &= \vec{v} \cdot \vec{v} - 4\vec{v} \cdot \vec{w} + 4\vec{w} \cdot \vec{w} \\ &= 1 - 4(0) + 4(2) = 9 \end{aligned}$$

$$\Rightarrow \|\vec{v} - 2\vec{w}\| = \sqrt{9} = 3.$$

(c) Compute the **cosine of the angle** between the vectors $\vec{v} + \vec{w}$ and $\vec{v} - 2\vec{w}$.

$$\begin{aligned} \text{First: } (\vec{v} + \vec{w}) \cdot (\vec{v} - 2\vec{w}) &= \vec{v} \cdot \vec{v} - \vec{v} \cdot \vec{w} - 2\vec{w} \cdot \vec{w} \\ &= 1 - 0 - 2(2) = -3. \end{aligned}$$

Then:

$$\cos \theta = \frac{(\vec{v} + \vec{w}) \cdot (\vec{v} - 2\vec{w})}{\|\vec{v} + \vec{w}\| \cdot \|\vec{v} - 2\vec{w}\|} = \frac{-3}{\sqrt{3} \cdot 3} = \frac{-1}{\sqrt{3}}$$