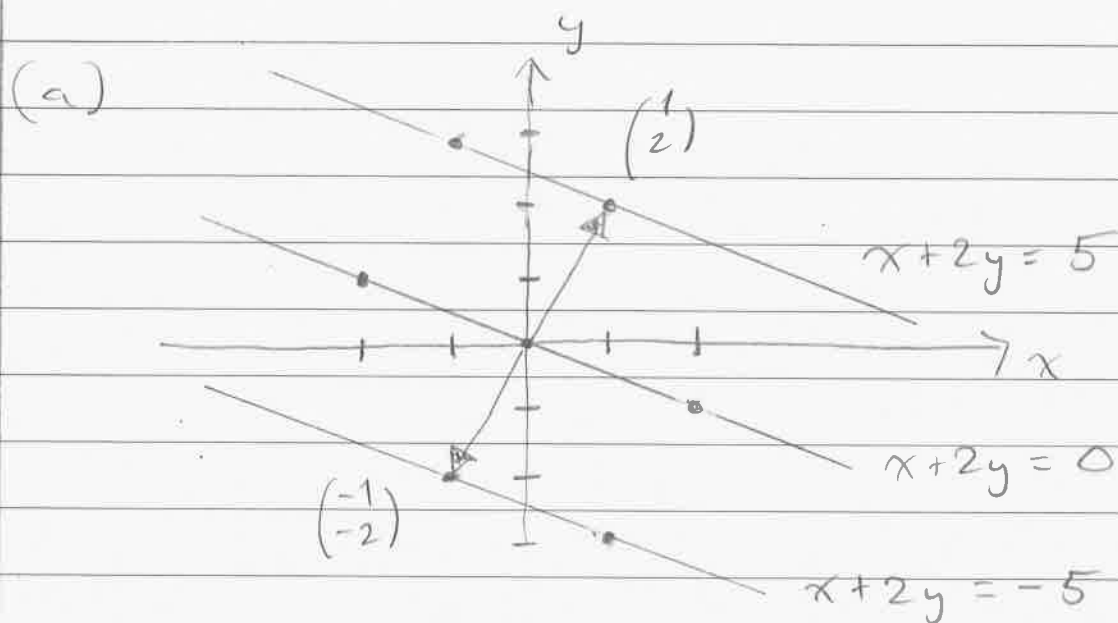


MTM 210, Spring 2016
HW2 Solutions

Problem 1:



(b) The equation $ax + by = c$ represents a line in the Cartesian plane that is perpendicular to the vector (a, b) .

To find one specific point on the line we will intersect it with the perpendicular line $(x, y) = t(a, b) = (ta, tb)$ to get

$$\begin{aligned} ax + by &= c \\ a(ta) + b(tb) &= c \end{aligned}$$



$$ta^2 + tb^2 = c$$

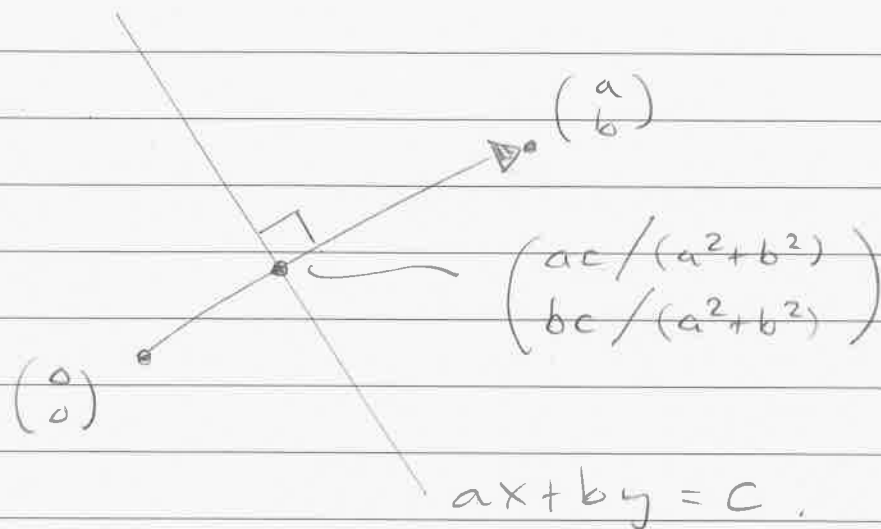
$$t(a^2 + b^2) = c$$

$$t = c / (a^2 + b^2)$$

This corresponds to the point

$$\begin{pmatrix} x \\ y \end{pmatrix} = t \begin{pmatrix} a \\ b \end{pmatrix} = \begin{pmatrix} ac / (a^2 + b^2) \\ bc / (a^2 + b^2) \end{pmatrix}$$

Picture:



(c) The line $ax + by = c$ is \perp to the vector (a, b) and the line $a'x + b'y = c'$ is \perp to the vector (a', b') . This implies that the two lines are \perp to each other if and only if



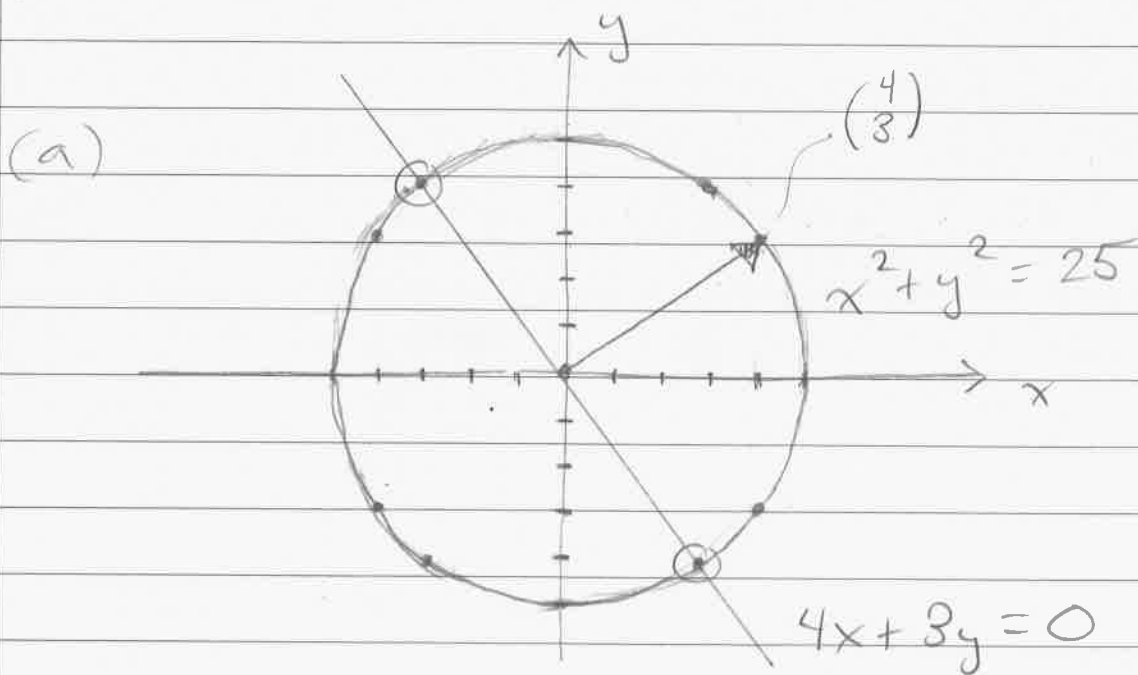
the vectors (a, b) & (a', b') are perpendicular to each other, i.e.,

$$\begin{pmatrix} a \\ b \end{pmatrix} \cdot \begin{pmatrix} a' \\ b' \end{pmatrix} = 0$$

$$aa' + bb' = 0$$

[Remark : This is the same answer you get using the "high-school" method of "negative reciprocal slopes". But I like this formula better because it still makes sense when one of the lines is vertical (slope ∞).]

Problem 2 :



(b) We are looking for the two points of intersection as shown in the picture.

To compute them we first solve

$$4x + 3y = 0$$

$$3y = -4x$$

$$y = -\frac{4}{3}x$$

and then substitute

$$x^2 + y^2 = 25$$

$$x^2 + \left(-\frac{4}{3}x\right)^2 = 25$$

$$x^2 + \frac{16}{9}x^2 = 25$$

$$\frac{25}{9}x^2 = 25$$

$$x^2 = 9$$

$$x = \pm 3$$

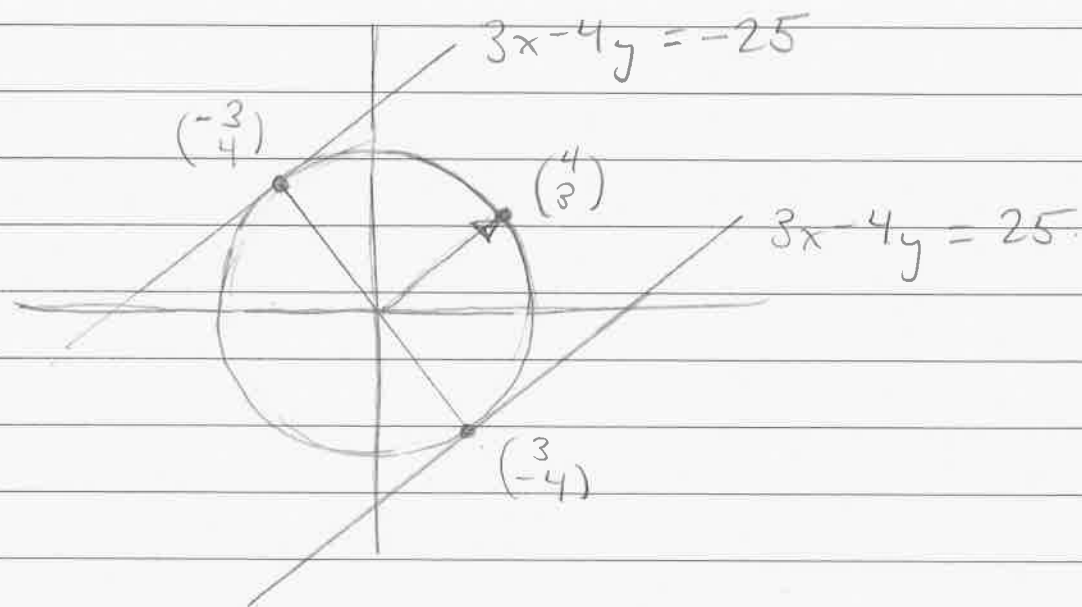
The corresponding values of y are

$$y = -\frac{4}{3}(3) = -4 \quad \& \quad y = -\frac{4}{3}(-3) = 4.$$

Thus the two points of intersection are

$$\begin{pmatrix} x \\ y \end{pmatrix} = \begin{pmatrix} 3 \\ -4 \end{pmatrix} \quad \& \quad \begin{pmatrix} x \\ y \end{pmatrix} = \begin{pmatrix} -3 \\ 4 \end{pmatrix}.$$

(c)



Both tangent lines are \perp to the vector $(3, -4)$ so the both have an equation of the form

$$3x - 4y = c.$$

The line containing point $(-3, 4)$ has

$$\begin{aligned} c &= 3x - 4y \\ &= 3(-3) - 4(4) \\ &= -9 - 16 = -25 \end{aligned}$$

and the line containing point $(3, -4)$ has

$$\begin{aligned} c &= 3x - 4y \\ &= 3(3) - 4(-4) \\ &= 9 + 16 = 25. \end{aligned}$$

Problem 3:

(a) First we rewrite the vector equation as a system of two number equations

$$(*) \quad x \begin{pmatrix} -1 \\ 1 \end{pmatrix} + y \begin{pmatrix} 2 \\ 0 \end{pmatrix} = \begin{pmatrix} 3 \\ 2 \end{pmatrix}$$

$$\begin{pmatrix} -x + 2y \\ x + 0y \end{pmatrix} = \begin{pmatrix} 3 \\ 2 \end{pmatrix}$$

$$(**) \quad \begin{cases} -x + 2y = 3 \\ x = 2 \end{cases}$$

Now the solution is easy to see.

Substituting $x = 2$ into the first equation gives

$$-2 + 2y = 3$$

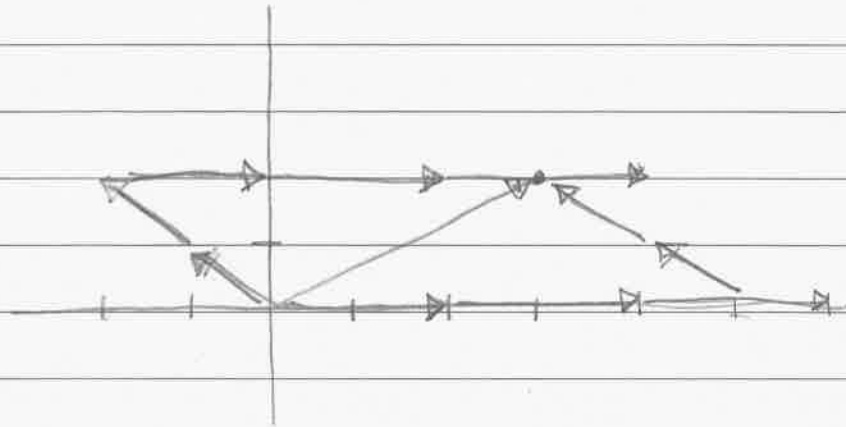
$$2y = 5$$

$$y = 5/2$$

and hence

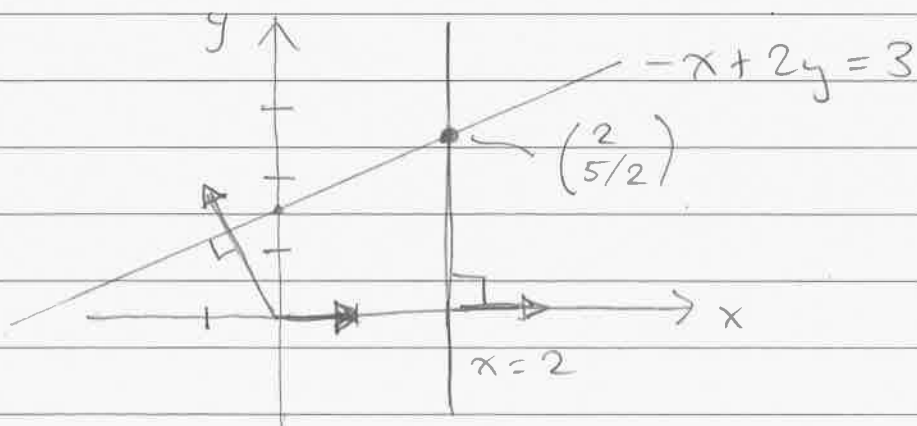
$$\begin{pmatrix} x \\ y \end{pmatrix} = \begin{pmatrix} 2 \\ 5/2 \end{pmatrix}$$

(b) Interpreting this as the solution of the vector equation (*) gives the picture:



[To get from $(0,0)$ to $(3,2)$ we move 2 times in the $(-1,1)$ direction and then $5/2$ times in the $(2,0)$ direction (or the other way around).]

(c) Interpreting this as the solution of the system (***) gives the picture:



[The two lines meet at the point $(2, 5/2)$.]

Problem 4:

(a) The intersection of the planes $x+2y-z=0$ and $x+y+2z=0$ is encoded by the system of equations

$$\begin{cases} x+2y-z=0 & (1) \\ x+y+2z=0 & (2) \end{cases}$$

We can eliminate x from (1) by subtracting.

$$\begin{array}{rcl} (1) & x+2y-z & = 0 \\ (2) & x+y+2z & = 0 \\ (1)-(2) & y-3z & = 0 \quad (3) \end{array}$$

Then we can eliminate y from (2) by subtracting

$$\begin{array}{rcl} (2) & x+y+2z & = 0 \\ (3) & y-3z & = 0 \\ (2)-(3) & x+5z & = 0 \quad (4) \end{array}$$

We obtain the simpler, but equivalent, system

$$\begin{cases} x+5z=0 & (4) \\ y-3z=0 & (3) \end{cases}$$

Now letting $z = t$ be free gives the solution

$$\begin{aligned}x &= -5z = -5t \\y &= 3z = 3t \\z &= z = 1t\end{aligned} \implies \begin{pmatrix} x \\ y \\ z \end{pmatrix} = t \begin{pmatrix} -5 \\ 3 \\ 1 \end{pmatrix}.$$

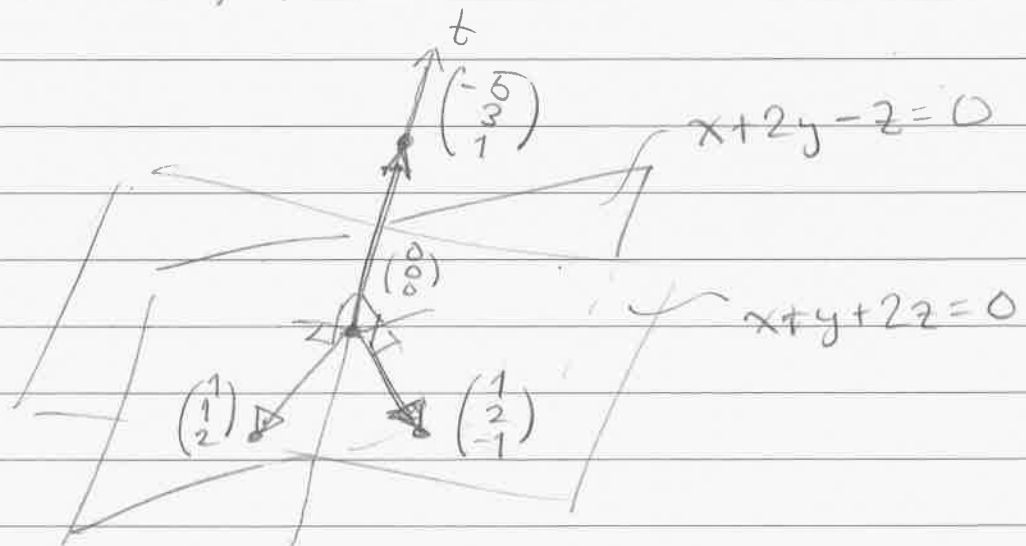
This is a line.

(b) Note that we can rewrite the equations (1) and (2) as

$$\begin{pmatrix} 1 \\ 2 \\ -1 \end{pmatrix} \cdot \begin{pmatrix} x \\ y \\ z \end{pmatrix} = 0 \quad \& \quad \begin{pmatrix} 1 \\ 1 \\ 2 \end{pmatrix} \cdot \begin{pmatrix} x \\ y \\ z \end{pmatrix} = 0.$$

So we can also say that $(x, y, z) = t(-5, 3, 1)$ are precisely the vectors that are simultaneously perpendicular to both $(1, 2, -1)$ & $(1, 1, 2)$.

Picture:



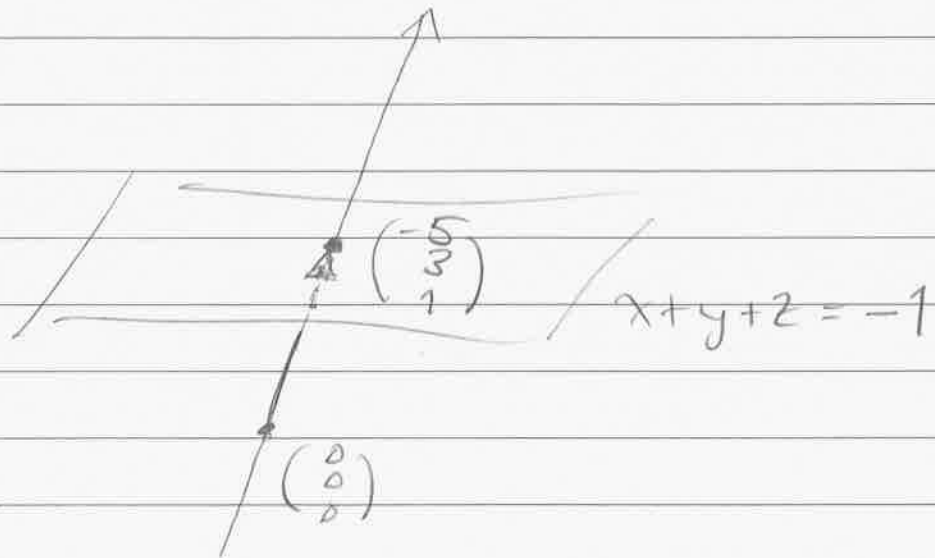
(c) Now we introduce a third plane $x + y + z = -1$.
To compute the intersection of this plane
with the line $(x, y, z) = (-5t, 3t, t)$
we substitute to get

$$\begin{aligned}x + y + z &= -1 \\-5t + 3t + t &= -1 \\-t &= -1 \\t &= 1.\end{aligned}$$

Hence the point of intersection is

$$\begin{pmatrix} x \\ y \\ z \end{pmatrix} = 1 \begin{pmatrix} -5 \\ 3 \\ 1 \end{pmatrix} = \begin{pmatrix} -5 \\ 3 \\ 1 \end{pmatrix}.$$

Picture:



(d) Finally, observe that the vector equation

$$x \begin{pmatrix} 1 \\ 1 \\ 1 \end{pmatrix} + y \begin{pmatrix} 1 \\ 1 \\ 2 \end{pmatrix} + z \begin{pmatrix} 1 \\ 2 \\ -1 \end{pmatrix} = \begin{pmatrix} -1 \\ 0 \\ 0 \end{pmatrix}$$

is equivalent to the system of three number equations

$$\begin{cases} x + y + z = -1 \\ x + y + 2z = 0 \\ x + 2y - z = 0. \end{cases}$$

And we already solved this system in parts (a) & (c). The answer is

$$\begin{pmatrix} x \\ y \\ z \end{pmatrix} = \begin{pmatrix} -5 \\ 3 \\ 1 \end{pmatrix}.$$

Geometrically, we interpret this as the unique point of intersection of the three planes.

Picture omitted.

